




1 ¿Cuál de los recipientes tiene mayor volumen?


(a)



(A)



(B)



B

(b)



(A)



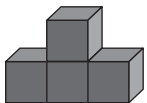
(B)



El mismo volumen.

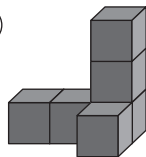
2 Indica la cantidad de cubos en cada construcción.

(a)



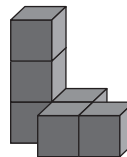
4 cubos

(c)



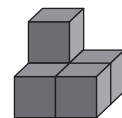
6 cubos

(e)



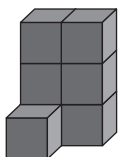
6 cubos

(g)



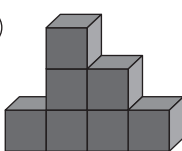
5 cubos

(b)



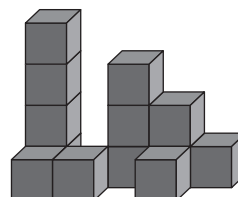
7 cubos

(d)



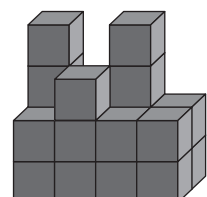
7 cubos

(f)



13 cubos

(h)



21 cubos