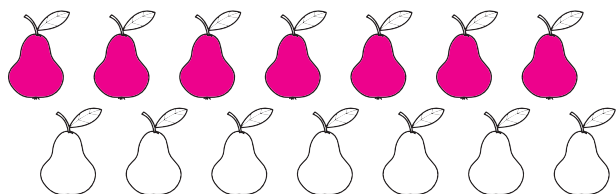
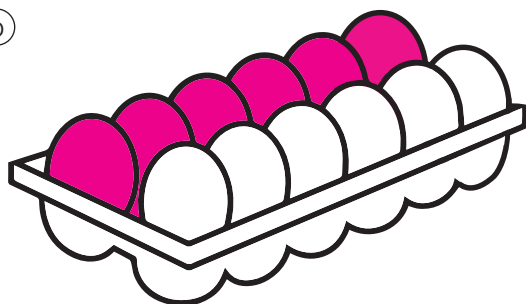


1 Pinta $\frac{1}{2}$ del total de cada grupo.

(a)




(b)




2 Pinta $\frac{1}{3}$ del total de cada grupo.

(a)




(b)



3 Indica qué parte del total corresponde a la cantidad de vasos con jugo.


(a)



$\frac{1}{2}$

del total de vasos tienen jugo.

(b)



$\frac{2}{4}$

del total de vasos tienen jugo.


(c)



$\frac{1}{5}$

del total de vasos tienen jugo.

(d)



$\frac{2}{6}$

del total de vasos tienen jugo.