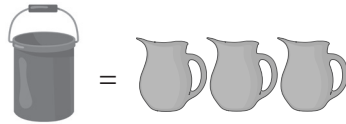



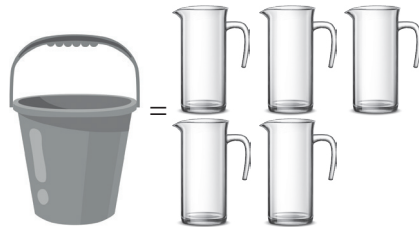



- 1 Determina el volumen en la unidad indicada, tal como se indica en el ejemplo.

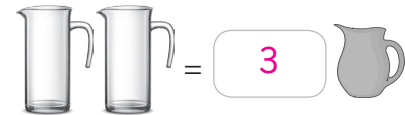

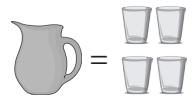
Ejemplo:



(a)

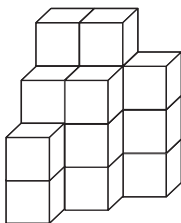


(b)



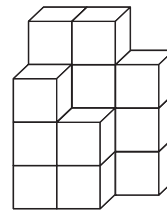
- 2 Determina el volumen en unidades de cubo.

(a)



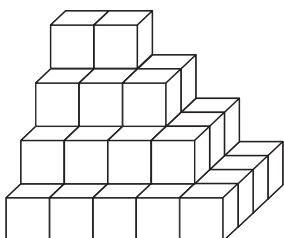
19 unidades de cubo.

(c)



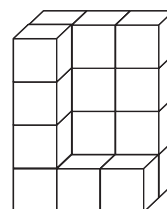
16 unidades de cubo.

(b)



40 unidades de cubo.

(d)



18 unidades de cubo.