




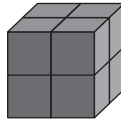
1 Mide el volumen en unidades de cubo.

(a)




6 unidades
de cubo.

(e)



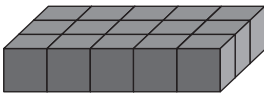
8 unidades
de cubo.

(i)



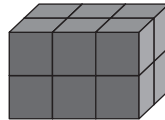
10 unidades
de cubo.

(b)



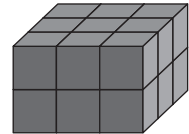
15 unidades
de cubo.

(f)




12 unidades
de cubo.

(j)



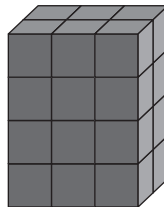
18 unidades
de cubo.

(c)



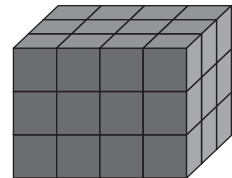
16 unidades
de cubo.

(g)



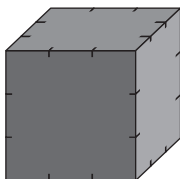
24 unidades
de cubo.

(k)




36 unidades
de cubo.

(d)



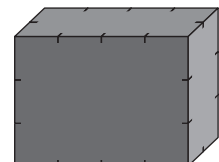
27 unidades
de cubo.

(h)



30 unidades
de cubo.

(l)



12 unidades
de cubo.

$$14 = \square + \square$$