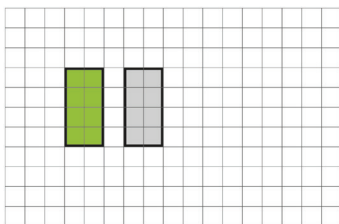


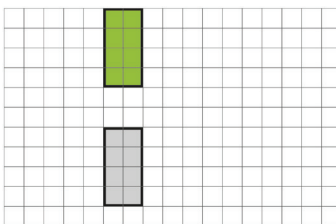
# EJERCICIOS

- 1 La figura verde es la imagen de la figura gris después de ser trasladada. Describe cada traslación.

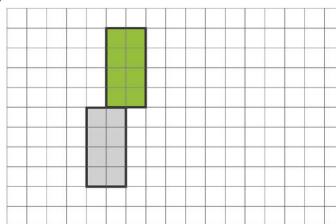
a



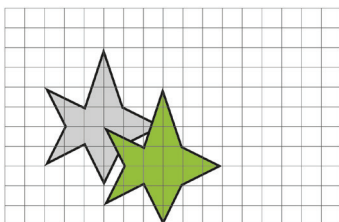
c



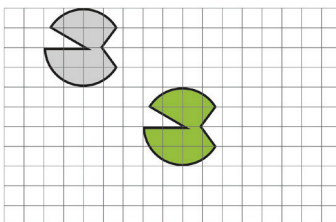
e



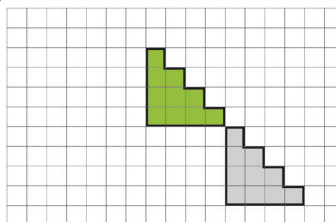
b



d

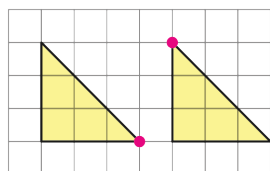


f

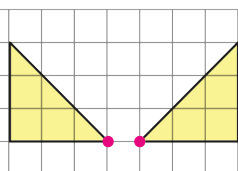


- 2 Para los siguientes pares de triángulos, indica cuáles corresponden a una reflexión:

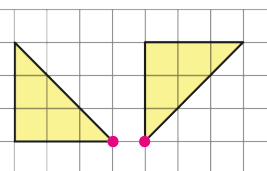
(A)



(B)

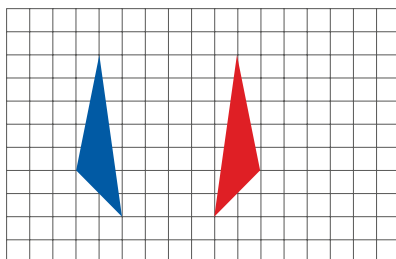


(C)

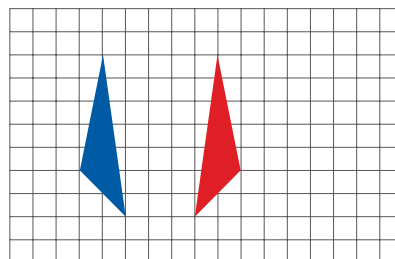


- 3 El triángulo rojo se obtuvo al reflejar el azul. En cada caso, ¿dónde dibujarías el eje de reflexión?

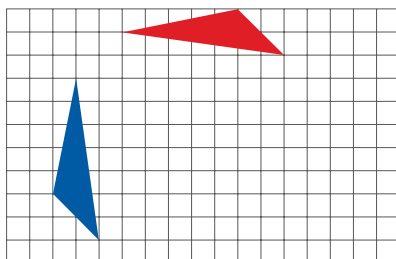
a



c



b



d

