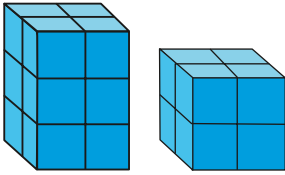
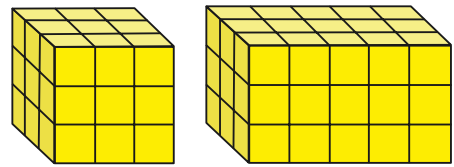


- 5 Compara el volumen de cada par de figuras compuestas por cubos unitarios. Explica tu estrategia.

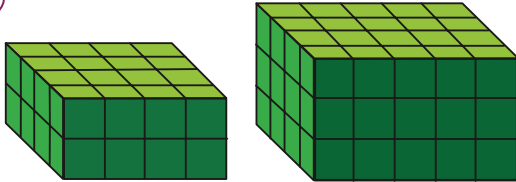
(a)



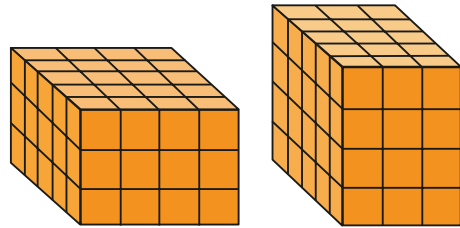
(c)



(b)

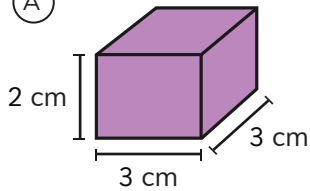


(d)

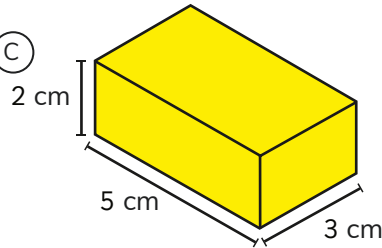


- 6 Ordena las siguientes figuras, de la que tiene mayor volumen a la que tiene menor volumen:

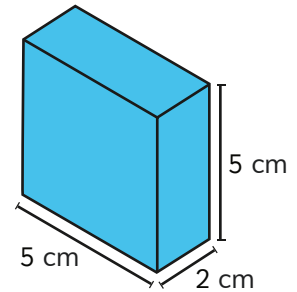
(A)



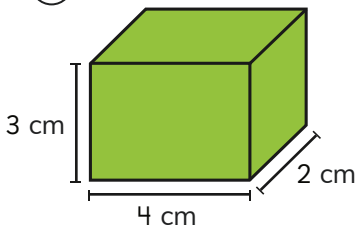
(C)



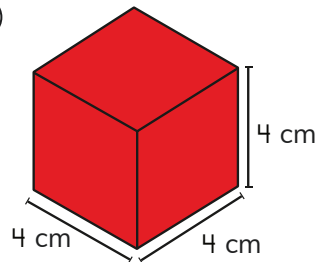
(E)



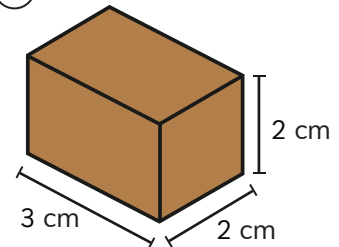
(B)



(D)



(F)



- 7 Calcula el volumen del gimnasio municipal.

